



①

# My Summer Packet




Name:


Name \_\_\_\_\_



# Summer Word Search



b	e	a	c	h	p	e	h	f	l
w	b	n	z	t	r	a	o	t	e
a	u	o	c	e	a	n	t	a	m
v	c	w	m	n	s	a	e	n	o
e	k	s	h	o	v	e	l	e	n
s	e	t	o	w	e	l	s	l	a
t	t	g	o	g	g	l	e	s	d
s	w	i	m	s	a	n	d	a	e




swim  
shovel  
sand  
goggles

bucket  
tan  
ocean  
waves

lemonade  
hot  
beach  
towel


Name \_\_\_\_\_

# Time for Vacation!




Directions: Write the hands on the clock to show the correct time.


3:30




10:30




1:30




5:30




2:30




8:30




12:30




7:30




4:30




6:30



9:30




11:30

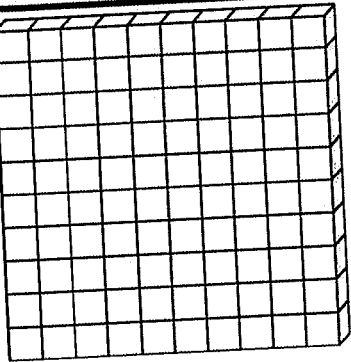


Name: \_\_\_\_\_

# Summer Base Tens Count and Color



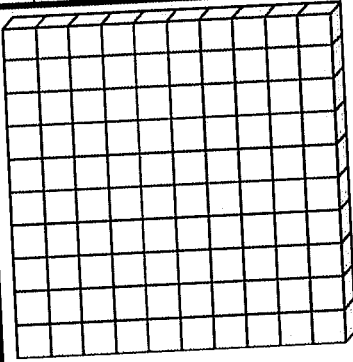
Directions: Read the numbers in each box. Count and color the base ten blocks to match. Answer the questions for each number.



39

\_\_\_ tens \_\_\_ ones

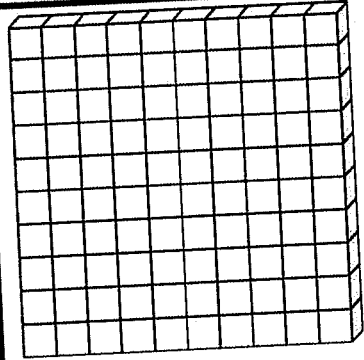
altogether \_\_\_\_\_



56

\_\_\_ tens \_\_\_ ones

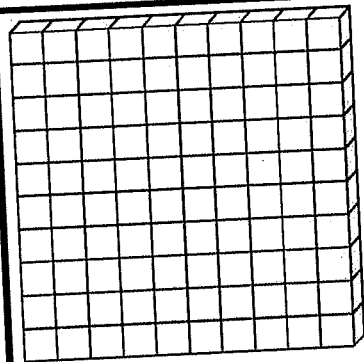
altogether \_\_\_\_\_



73

\_\_\_ tens \_\_\_ ones

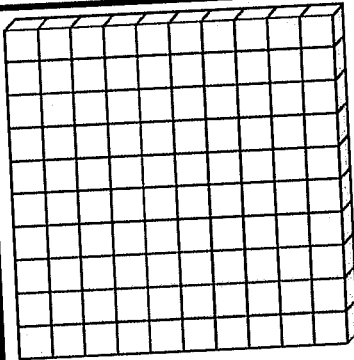
altogether \_\_\_\_\_



99

\_\_\_ tens \_\_\_ ones

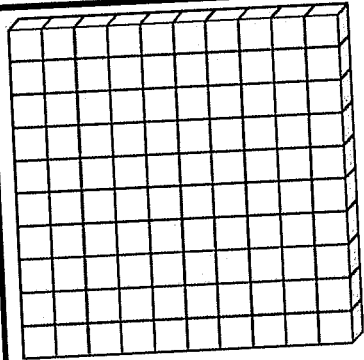
altogether \_\_\_\_\_



48

\_\_\_ tens \_\_\_ ones

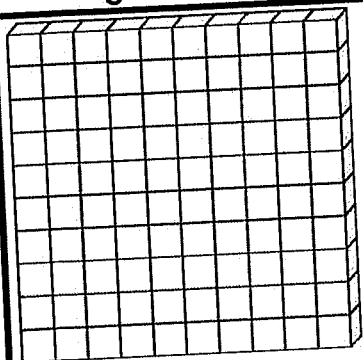
altogether \_\_\_\_\_



33

\_\_\_ tens \_\_\_ ones

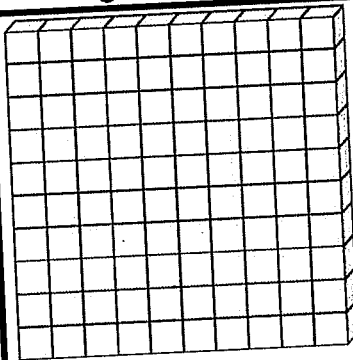
altogether \_\_\_\_\_



65

\_\_\_ tens \_\_\_ ones

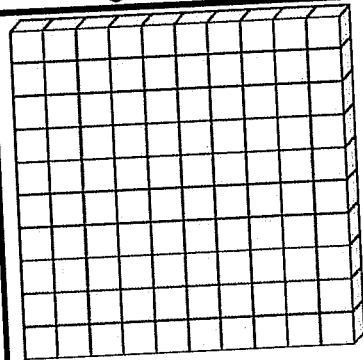
altogether \_\_\_\_\_



71

\_\_\_ tens \_\_\_ ones

altogether \_\_\_\_\_



82


\_\_\_ tens \_\_\_ ones

altogether \_\_\_\_\_

Name \_\_\_\_\_

# Summer Sentences!

Directions: Choose a word and/or phrase from each column.  
Write 5 complete sentences using each word and phrase only once.



Who

The crab  
My friend  
My dog  
I  
The seal

Did What

hopped  
jumped  
crawled  
ran  
slept

Where

in the sand.  
under an umbrella.  
by a sea turtle.  
on the boat.  
near a crab.

1.

2.

3.

4.

5.

Name \_\_\_\_\_

# Count On!



Directions: Look at the coins in each row. Write the total amount for the coins as you count on. The first one has been started for you.



penny  
1 cent



nickel  
5 cents



dime  
10 cents



10



11



12



Total

\_\_\_\_\_ ¢



Total

\_\_\_\_\_ ¢



Total

\_\_\_\_\_ ¢



Total

\_\_\_\_\_ ¢



Total

\_\_\_\_\_ ¢





Total

\_\_\_\_\_ ¢


Name \_\_\_\_\_

# Summer Fact Families


Directions: Use the 3 numbers to write 4 different facts.




	+		=	
	+		=	
	-		=	
	-		=	




	+		=	
	+		=	
	-		=	
	-		=	




	+		=	
	+		=	
	-		=	
	-		=	



	+		=	
	+		=	
	-		=	
	-		=	




	+		=	
	+		=	
	-		=	
	-		=	



	+		=	
	+		=	
	-		=	
	-		=	

Name \_\_\_\_\_

# Action Words



Directions: Read each sentence. Choose the correct verb (action word) to complete the sentence. Write the word on the line.

1. We would like to \_\_\_\_\_ a sandcastle.  
builds    build

2. Peg likes to \_\_\_\_\_ on the tire.  
swing    swings

3. Max \_\_\_\_\_ hotdogs on the grill.  
cooks    cook

4. Jane \_\_\_\_\_ lemonade.  
drink    drinks

5. My dog \_\_\_\_\_ in the pool.  
jump    jumps


6. He will \_\_\_\_\_ in the sand.  
play    plays

7. The popsicles \_\_\_\_\_ in the hot sun.  
melts    melt

8. Did you \_\_\_\_\_ hotdogs?  
makes    make

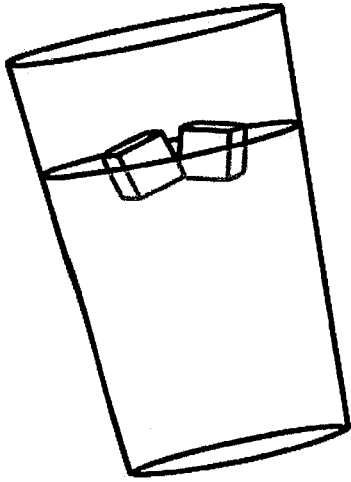
9. Jack \_\_\_\_\_ the little red crab.  
see    sees

10. She \_\_\_\_\_ on Saturdays.  
swim    swims






Name \_\_\_\_\_

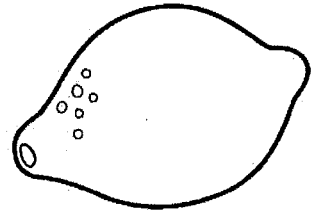
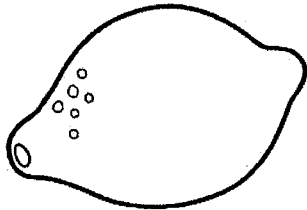
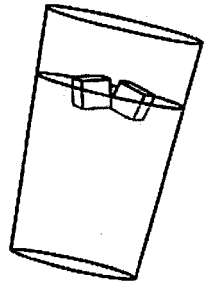


# Let's Sell Lemonade



Day of the week # of cups

Sunday	6
Monday	5
Tuesday	7
Wednesday	8
Thursday	12
Friday	9
Saturday	4



Directions: Use the Chart to answer the questions below.

1. What two days did the twins sell the most lemonade?

\_\_\_\_\_

2. What two days did the twins sell the least cups of lemonade?

\_\_\_\_\_

3. In all, how many cups of lemonade did they sell on Wednesday and Friday?

\_\_\_\_\_

4. In all, how many cups of lemonade did they sell Sunday, Monday and Saturday?

5. How many more cups of lemonade did they sell on Thursday than Tuesday?

6. How many more cups of lemonade did they sell on Wednesday than Sunday?

\_\_\_\_\_





































Name \_\_\_\_\_

© Annie Moffatt © The Moffatt Girls 2013

# Money Patterns



Directions: Look at the patterns in each row.  
Complete the pattern by writing the value of the coin in the boxes below.  
Bonus: How much is each row of coins worth?

									
1¢	5¢								
									
									
									
									
									


Name \_\_\_\_\_

# Ice Cream Facts

Directions: Solve the problems.  
Cut and paste them in the correct columns.

True

False



Week 3: Day 1

©Annie Moffatt @ The Moffatt Girls 2014

$$2 + 7 = 6 + 3$$

$$2 + 5 = 8 + 0$$

$$9 + 1 = 7 + 2$$

$$5 + 2 = 3 + 4$$

$$4 + 5 = 5 + 3$$

$$4 + 4 = 3 + 4$$

$$6 + 4 = 5 + 5$$


$$10 + 5 = 8 + 6$$

$$3 + 3 = 6 + 2$$

$$2 + 4 = 3 + 3$$

Name: \_\_\_\_\_

# Let's Write a Letter!



Directions: Write a letter to a friend about your summer vacation.

\_\_\_\_\_ Date

\_\_\_\_\_ Greeting and person's name

\_\_\_\_\_

\_\_\_\_\_

\_\_\_\_\_


\_\_\_\_\_

\_\_\_\_\_

\_\_\_\_\_

\_\_\_\_\_

(body of the letter)




\_\_\_\_\_ (closing)

\_\_\_\_\_ (signature)

Name \_\_\_\_\_

# Bears in the Camp!


Directions: Read the statements at the bottom of the page.  
Write the correct number for each set.



1. Four groups of ten and five ones =
2. Eight groups of ten and nine ones =
3. Seven groups of ten and three ones =
4. Nine groups of ten and nine ones =
5. Six groups of ten and two ones =
6. Five groups of ten and five ones =
7. Three groups of ten and eight ones =
8. One group of ten and zero ones =



Name \_\_\_\_\_

# Summer Items




Directions: Look at each set of items and answer the questions.


Which does not belong? Draw an X on the item that does not belong. Tell how the other items are the same.




Which does not belong? Draw an X on the item that does not belong. Tell how the other items are the same.



Which does not belong? Draw an X on the item that does not belong. Tell how the other items are the same.




Which does not belong? Draw an X on the item that does not belong. Tell how the other items are the same.



Name \_\_\_\_\_

# Number FUN!

Directions: Find the numbers words. Use the word bank to help you.



s	e	v	e	n	t	e	e	n	f
i	f	o	u	r	t	e	e	n	i
x	c	b	r	s	y	l	p	t	f
t	h	i	r	t	e	e	n	w	t
e	h	t	w	e	l	v	e	e	e
e	i	g	h	t	e	e	n	n	e
n	q	h	y	w	z	n	m	t	n
n	i	n	e	t	e	e	n	y	a

## Word Bank

eleven  
fourteen  
twelve  
sixteen  
nineteen  
twenty  
thirteen  
fifteen  
eighteen  
seventeen

### Odd Number Words


1. \_\_\_\_\_
2. \_\_\_\_\_
3. \_\_\_\_\_
4. \_\_\_\_\_
5. \_\_\_\_\_
6. \_\_\_\_\_

### Even Number Words

1. \_\_\_\_\_
2. \_\_\_\_\_
3. \_\_\_\_\_
4. \_\_\_\_\_
5. \_\_\_\_\_
6. \_\_\_\_\_

Name \_\_\_\_\_

# Missing Addends



Directions: Solve each number sentence by adding the missing addend.

$5 + \square = 16$

$\square + 9 = 14$

$\square + 8 = 19$

$8 + \square = 13$

$4 + \square = 20$

$\square + 6 = 18$

$\square + 6 = 19$

$0 + \square = 16$

$7 + \square = 17$

$\square + 1 = 24$

$\square + 4 = 12$

$5 + \square = 12$

$9 + \square = 18$

$\square + 4 = 15$

$\square + 5 = 19$

$9 + \square = 11$

$2 + \square = 20$

$\square + 6 = 19$

$\square + 7 = 14$

$3 + \square = 13$

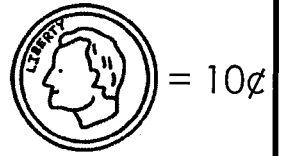











Name: \_\_\_\_\_


# Summer Shopping

Look at the price tag on each summer item. Color the coins needed to buy the item. On the bottom row, you decide how much each item is worth. Write the price on the tag and color the coins to match the amount.

A dime is  
10 cents.





SUMMER

I like summer because...

---

---

---

---

---

---

---


---

---


---

Name \_\_\_\_\_

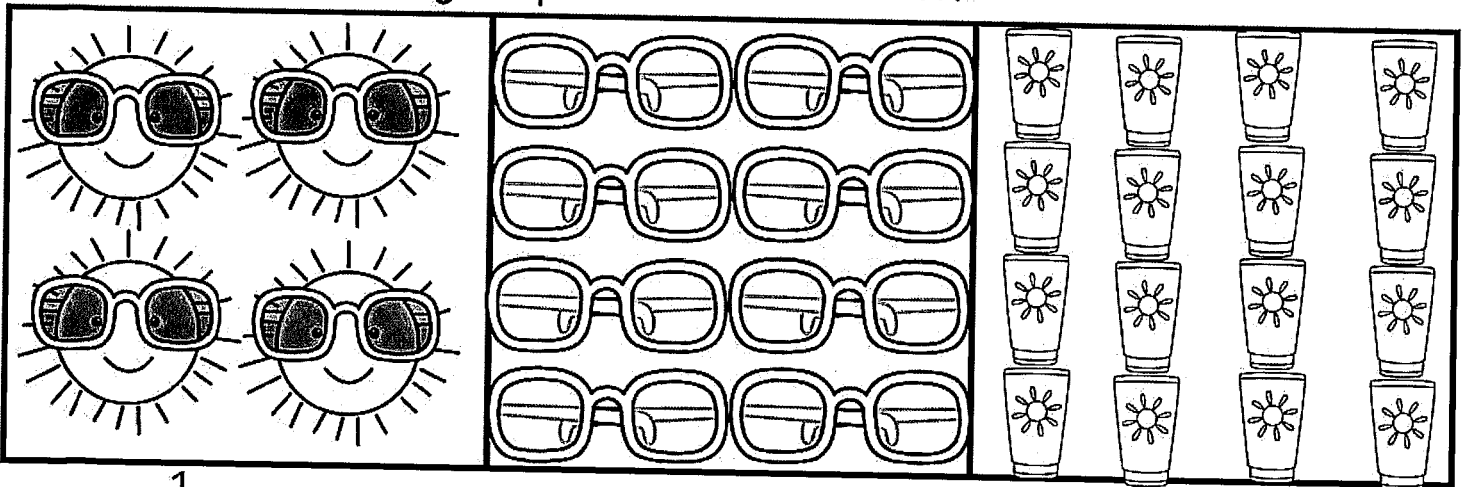
# Fractions for Summer




Color  $\frac{1}{2}$  of each group of summer items.



Color  $\frac{1}{4}$  of each group of summer items.




Color  $\frac{1}{3}$  of each group of summer items.



# Caterific Drawings

Directions: Draw a face on your cat and then write about your cat on the lines below.



Four sets of horizontal writing lines, each consisting of a solid top line, a dashed middle line, and a solid bottom line, for writing about the cat.